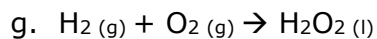
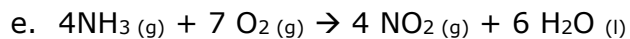
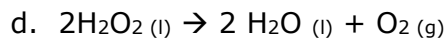
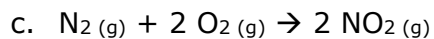
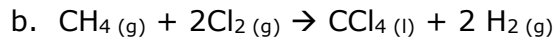


Enthalpy Practice

Name: _____ Pd: _____

1. Use Table R-11 on pg. 975 of your book to calculate the ΔH_{rxn} for each of the following reactions.



2. Define Hess's Law.